



Revision of Hinges and locks

Q1. Name any 2 of the following fittings and state where they are used:



(a)



(b)



(c)


Q2. Name any 2 of the following fittings and state where they are used:



(a)



(b)



(c)


Q3. Name any 2 of the following fittings and state where they are used:



(a)



(b)



(c)

Q4. Name any 2 of the following fittings and state where they are used:



(a)



(b)



(c)